

Capítulo 2



Yupaykuna

Los Números

0

illak

1

shuk



2

ishkay



3

kimsa



4

chusku




5

pichka




6

sukta



7

kanchis



8

pusak



9

iskun



10

chunka



11

chunka shuk




12

chunka ish kay



13

chunka kimsa



14

chunka chusku



15

chunka pichka



16

chunka sukta




17

chunka kanchis



18

chunka pusak



19

chunka iskun



A partir del número **veinte** solo describimos los números

20	ishkay chunka
21	ishkay chunka shuk
22	ishkay chunka ishkay
23	ishkay chunka kimsa
24	ishkay chunka chusku
25	ishkay chunka pichka
26	ishkay chunka sukta
27	ishkay chunka kanchis
28	ishkay chunka pusak
29	ishkay chunka iskun

30	kimsa chunka
40	chusku chunka
50	pichka chunka
60	sukta chunka
70	kanchis chunka
80	pusak chunka
90	iskun chunka
100	patsak

Watayukmanta rimashun

La edad

Kikinka mashna watakunatak charinki



Ñukaka **pusak watakunatami charini**

Kichwa

Kikinka mashna watakunatak charinki

Ñukaka watakunatami charini

Castellano

¿Cuántos años tienes?

Tengo años.

Ruraykuna

Ejercicios

Yupaykunapa paktachiy (mana shimikunawan).

Completa con números (no con palabras) lo siguiente.

ishkay _____

pichka _____

chunka _____

chunka ishkay _____

chunka sukta _____

chunka pusak _____

chunka kanchis _____

ishkay chunka _____

kimsa chunka shuk _____

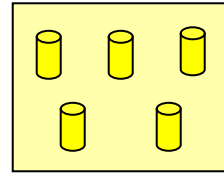

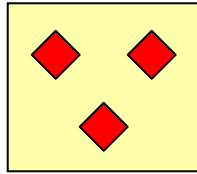

pichka chunka _____


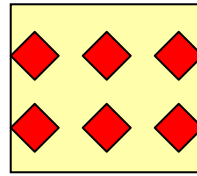
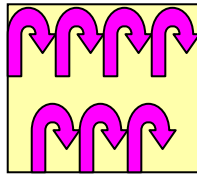
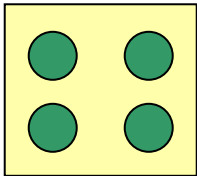
chusku chunka kimsa _____

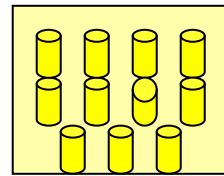

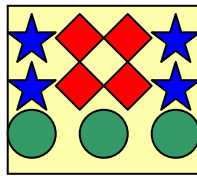

kimsa chunka sukta _____

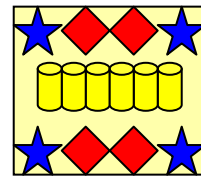
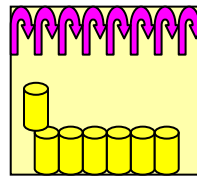
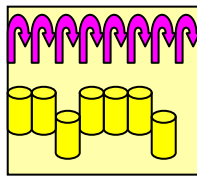
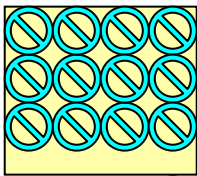
ishkay chunka iskun _____

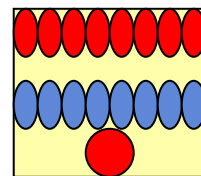
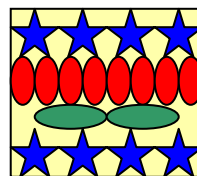
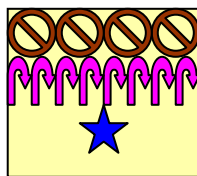
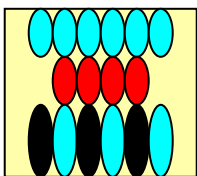
Kichwapi yupaykunapa shutita killay.
 Escribe los nombres de los números en kichwa.











Kichwapi yupaykunapa shutita killay.
Escribe los nombres de los números en kichwa.

5

7

10

12

15

18

20

22

24

27

29

30

32

34

38

40

42

45

49

50

Kay yapachikunata rurashpa llukshishkata kichwapi killkay.
Realiza las siguientes sumas y escribe las respuestas en kichwa.

ishkay + kimsa = _____

chusku + chusku = _____

ishkay + pichka = _____

shuk + iskun = _____

pichka + sukta = _____

chunka ishkay + sukta = _____

Chunka chusku + pichka = _____

Chunka kanchis + kimsa = _____

Chunka pusak + iskun = _____

Chunka sukta + kanchis = _____

Chunka pichka + illak = _____

Chunka shuk + chunka = _____

Kay yapachikunata rurashpa llukshishkata kichwapi killkay.
Realiza las siguientes sumas y escribe las respuestas en kichwa:

$2 + 3 = \underline{\hspace{2cm}}$

$2 + 0 = \underline{\hspace{2cm}}$

$3 + 3 = \underline{\hspace{2cm}}$

$4 + 4 = \underline{\hspace{2cm}}$

$2 + 5 = \underline{\hspace{2cm}}$

$6 + 3 = \underline{\hspace{2cm}}$

$3 + 7 = \underline{\hspace{2cm}}$

$9 + 5 = \underline{\hspace{2cm}}$

$10 + 2 = \underline{\hspace{2cm}}$

$15 + 2 = \underline{\hspace{2cm}}$

$17 + 8 = \underline{\hspace{2cm}}$